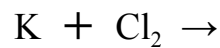
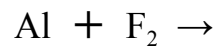
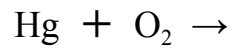
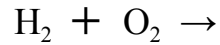


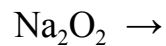
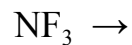
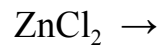
Name: _____

Predicting Products

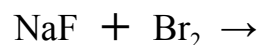
Predict the products for the following synthesis reactions and balance:



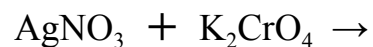
Predict the products for the following decomposition reactions and balance:



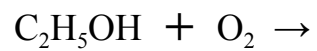
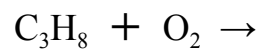
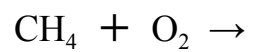
Predict the products for the following single replacement reactions and balance:



Predict the products for the following double replacement reactions and balance:



Predict the products for the following combustion reactions and balance:



Predict the products for the following neutralization reactions and balance:

